
End of Test


Total Marks: 80

Check your work carefully before handing in
Page 0 | Number Recognition Assessment

Question 1

[5 marks]

Look at the number blocks below and answer the questions:



a) How many tens are shown? [1 mark]

b) How many ones are shown? [1 mark]

c) Write the total number shown: [1 mark]

d) Write this number in words: [2 marks]

Question 2

End of Test

[6 marks]

Total Marks: 80

Help Tony Ten and Oliver One sort these numbers into their correct houses:

45

67

23

89

Number	Tens House	Ones House
Example: 34	3	4
1.	_____	_____
2.	_____	_____
3.	_____	_____

4.	—	—
----	---	---

End of Test

Total Marks: 80

Check your work carefully before handing in
Page 0 | Number Recognition Assessment

Question 3**[8 marks]**

Complete the Number Detective challenge:

a) Fill in the missing numbers on the number line: [4 marks]

0 _ 20 _ 40 _ 60 _ 80 _ 100

b) Circle all the tens numbers in this group: [2 marks]

45

30

67

50

12

70

c) What comes before and after? [2 marks]

___	45	___
___	70	___

Question 4**[6 marks]**

Count backwards and fill in the missing numbers:

a) Starting from 50: [3 marks]

50, __, __, 47, __, 45, __, 43

b) Starting from 30: [3 marks]

30, __, 28, __, __, 25, 24

Total Marks: 80

Check your work carefully before handing in
Page 0 | Number Recognition Assessment


Question 5

[10 marks]


Read the number story and solve the problems:

The class is collecting marbles. They have: 2 bags of ten marbles each 7 loose marbles


a) Draw the tens and ones to show the marbles [3 marks]



b) Write the total number of marbles [2 marks]



c) If they get 1 more bag of ten marbles, how many will they have? [3 marks]



d) Write your answer in words [2 marks]



End of Test

Total Marks: 80

Check your work carefully before handing in
Page 0 | Number Recognition Assessment

Question 6

[10 marks]

Help the shopkeeper solve these problems:

The toy shop has: - 3 boxes of ten cars - 4 loose cars - 2 boxes of ten dolls - 5 loose dolls

a) How many cars are there in total? Show your working. [3 marks]

b) How many dolls are there in total? Show your working. [3 marks]

c) How many toys are there altogether? [4 marks]

Working out:

Answer: _____

End of Test

Total Marks: 80

Check your work carefully before handing in
Page 0 | Number Recognition Assessment

Question 7

[8 marks]

Complete these number patterns:

a) Count in tens: [4 marks]

10, 20, __, __, 50, __, __, 80

b) Count in fives: [4 marks]

5, __, 15, __, 25, __, 35, __

Question 8

[12 marks]

Solve these pattern puzzles:

a) What are the missing numbers? [6 marks]

Pattern 1: 2, 12, 22, __, __, 52 Pattern 2: 5, 15, __, 35, __, 55

b) Create your own number pattern using tens. Fill in 6 numbers: [6 marks]

My pattern: __, __, __, __, __, __

Explain your pattern: _____

End of Test

Total Marks: 80

Question 9

[10 marks]

Solve these number puzzles:

a) I am thinking of a number: [5 marks]

• I am greater than 45 • I am less than 60 • I have 5 ones • I am an even number What number am I? _____

b) Complete the number sentence: [5 marks]

73 = ____ tens and ____ ones
The number before 73 is ____
The number after 73 is ____
Is 73 odd or even? ____

End of Test

Total Marks: 80

Check your work carefully before handing in
Page 0 | Number Recognition Assessment

End of Test

Total Marks: 80

Check your work carefully before handing in
Page 0 | Number Recognition Assessment