



Introduction

Welcome to this assessment on the key changes in societies in the Limpopo Valley between 900 AD and 1300 AD. This assessment is designed for middle school students in Grade 6 to 8, following the CAPS curriculum in South Africa. The purpose of this assessment is to evaluate your understanding of the impact of trade, technology, and environmental factors on the social, economic, and cultural development of the region.

Section 1: Multiple-Choice Questions

Choose the correct answer for each question.

1. What was the main factor that led to the growth of cities in the Limpopo Valley between 900 AD and 1300 AD?
 - A) Trade
 - B) Technology
 - C) Environmental factors
 - D) All of the above
2. Which of the following was a result of the introduction of new technologies in the Limpopo Valley during this period?
 - A) Increased food production
 - B) Improved transportation
 - C) Development of new social classes
 - D) All of the above
3. What was the impact of trade on the social development of the region?
 - A) It led to the emergence of new social classes
 - B) It resulted in the decline of traditional social structures
 - C) It had no significant impact on social development
 - D) It led to the development of new cultural practices
4. How did environmental factors shape the economic development of the region?
 - A) They led to the development of new industries
 - B) They resulted in the decline of traditional industries
 - C) They had no significant impact on economic development
 - D) They led to the emergence of new trade routes
5. What was the role of technology in shaping the cultural development of the region?
 - A) It led to the development of new cultural practices
 - B) It resulted in the decline of traditional cultural practices
 - C) It had no significant impact on cultural development
 - D) It led to the emergence of new art forms

Section 2: Short-Answer Questions

Answer each question in 1-2 paragraphs.

1. Describe the key changes in societies in the Limpopo Valley between 900 AD and 1300 AD.

2. Analyze the impact of trade on the economic development of the region.

3. Evaluate the role of environmental factors in shaping the social development of the region.

Section 3: Critical Thinking Questions

Answer each question in 1-2 paragraphs.

1. How did the introduction of new technologies in the Limpopo Valley during this period affect the social and economic development of the region?

2. What were the consequences of the growth of cities in the Limpopo Valley between 900 AD and 1300 AD?

Copyright 2024 Planit Teachers. All rights reserved.

3. How did trade and environmental factors interact to shape the cultural development of the region?



Section 4: Creative Activity

Imagine you are a historian living in the Limpopo Valley during this period. Write a diary entry describing the changes you have observed in the region over the past 100 years.

Section 5: Map Skills

Use the map of the Limpopo Valley to answer the following questions:


1. Identify the major trade routes in the region.

2. Label the cities that emerged during this period.

3. Describe the environmental features of the region and how they affected the development of the societies.


Section 6: Timeline

Create a timeline of the key events in the Limpopo Valley between 900 AD and 1300 AD.



Section 7: Graphic Organizer

Complete the graphic organizer to show the relationships between trade, technology, environmental factors, and the social, economic, and cultural development of the region.



Section 8: Case Study

Read the following case study and answer the questions that follow:

The city of Mapungubwe was a major trading center in the Limpopo Valley during this period. The city was located on a hill overlooking the Limpopo River and was an important center for the trade of gold, ivory, and other valuable commodities.

1. What were the advantages of Mapungubwe's location?

2. How did the city's trade networks contribute to its growth and development?

3. What were the social and cultural implications of Mapungubwe's emergence as a major trading center?

Section 9: Debate

Debate the following topic:

The growth of cities in the Limpopo Valley between 900 AD and 1300 AD was primarily driven by trade.

Section 10: Reflection

Reflect on what you have learned about the Limpopo Valley during this period. What were the most significant changes that occurred in the region? How did these changes affect the social, economic, and cultural development of the region?

Section 11: Group Activity

Work in groups to complete the following activity:

Group Activity: Mapping the Limpopo Valley

Use the map of the Limpopo Valley to identify the major trade routes, cities, and environmental features. Discuss the following questions in your group:

1. How did the trade routes contribute to the growth and development of the cities in the region?

2. What were the advantages and disadvantages of the environmental features in the region?

3. How did the cities in the region interact with each other and with other regions?

Section 12: Reflection and Feedback

Reflect on what you have learned about the Limpopo Valley during this period. Provide feedback to your peers on their participation in the group activity.

Reflection

What did you learn about the Limpopo Valley during this period? What were the most significant changes that occurred in the region? How did these changes affect the social, economic, and cultural development of the region?

Copyright 2024 Planit Teachers. All rights reserved.

Feedback

Provide feedback to your peers on their participation in the group activity. What did they do well? What could they improve on?

Section 13: Conclusion

In conclusion, the Limpopo Valley between 900 AD and 1300 AD was a region of significant change and development. The growth of cities, the introduction of new technologies, and the impact of environmental factors all contributed to the social, economic, and cultural development of the region.

Summary

Summarize the main points of the assessment. What were the key changes that occurred in the Limpopo Valley during this period? How did these changes affect the social, economic, and cultural development of the region?

Section 14: Additional Resources

For further learning, refer to the following resources:

Books

- Book 1: "The Limpopo Valley: A History" by John Smith
- Book 2: "The Growth of Cities in the Limpopo Valley" by Jane Doe

Websites

- Website 1: www.limpopovalley.com
- Website 2: www.history.com

Section 15: Glossary

Define the following terms:

Glossary

- Term 1: Trade
- Term 2: Technology
- Term 3: Environmental factors

Section 16: Bibliography

List the sources used in the assessment:

Bibliography

- Source 1: "The Limpopo Valley: A History" by John Smith
- Source 2: "The Growth of Cities in the Limpopo Valley" by Jane Doe

Section 17: Index

Index of key terms and concepts:

Index

- Term 1: Trade
- Term 2: Technology
- Term 3: Environmental factors



Introduction

Welcome to this assessment on the key changes in societies in the Limpopo Valley between 900 AD and 1300 AD. This assessment is designed for middle school students in Grade 6 to 8, following the CAPS curriculum in South Africa. The purpose of this assessment is to evaluate your understanding of the impact of trade, technology, and environmental factors on the social, economic, and cultural development of the region.

Section 1: Multiple-Choice Questions

Choose the correct answer for each question.

1. What was the main factor that led to the growth of cities in the Limpopo Valley between 900 AD and 1300 AD?
 - A) Trade
 - B) Technology
 - C) Environmental factors
 - D) All of the above
2. Which of the following was a result of the introduction of new technologies in the Limpopo Valley during this period?
 - A) Increased food production
 - B) Improved transportation
 - C) Development of new social classes
 - D) All of the above
3. What was the impact of trade on the social development of the region?
 - A) It led to the emergence of new social classes
 - B) It resulted in the decline of traditional social structures
 - C) It had no significant impact on social development
 - D) It led to the development of new cultural practices
4. How did environmental factors shape the economic development of the region?
 - A) They led to the development of new industries
 - B) They resulted in the decline of traditional industries
 - C) They had no significant impact on economic development
 - D) They led to the emergence of new trade routes
5. What was the role of technology in shaping the cultural development of the region?
 - A) It led to the development of new cultural practices
 - B) It resulted in the decline of traditional cultural practices
 - C) It had no significant impact on cultural development
 - D) It led to the emergence of new art forms

Section 2: Short-Answer Questions

Answer each question in 1-2 paragraphs.

1. Describe the key changes in societies in the Limpopo Valley between 900 AD and 1300 AD.

2. Analyze the impact of trade on the economic development of the region.

3. Evaluate the role of environmental factors in shaping the social development of the region.

Section 3: Critical Thinking Questions


Answer each question in 1-2 paragraphs.

1. How did the introduction of new technologies in the Limpopo Valley during this period affect the social and economic development of the region?

2. What were the consequences of the growth of cities in the Limpopo Valley between 900 AD and 1300 AD?

Copyright 2024 Planit Teachers. All rights reserved.

3. How did trade and environmental factors interact to shape the cultural development of the region?



Section 4: Creative Activity

Imagine you are a historian living in the Limpopo Valley during this period. Write a diary entry describing the changes you have observed in the region over the past 100 years.

Section 5: Map Skills

Use the map of the Limpopo Valley to answer the following questions:


1. Identify the major trade routes in the region.

2. Label the cities that emerged during this period.

3. Describe the environmental features of the region and how they affected the development of the societies.


Section 6: Timeline

Create a timeline of the key events in the Limpopo Valley between 900 AD and 1300 AD.



Section 7: Graphic Organizer

Complete the graphic organizer to show the relationships between trade, technology, environmental factors, and the social, economic, and cultural development of the region.



Section 8: Case Study

Read the following case study and answer the questions that follow:

The city of Mapungubwe was a major trading center in the Limpopo Valley during this period. The city was located on a hill overlooking the Limpopo River and was an important center for the trade of gold, ivory, and other valuable commodities.

1. What were the advantages of Mapungubwe's location?

2. How did the city's trade networks contribute to its growth and development?

3. What were the social and cultural implications of Mapungubwe's emergence as a major trading center?

Section 9: Debate

Debate the following topic:

The growth of cities in the Limpopo Valley between 900 AD and 1300 AD was primarily driven by trade.

Section 10: Reflection

Reflect on what you have learned about the Limpopo Valley during this period. What were the most significant changes that occurred in the region? How did these changes affect the social, economic, and cultural development of the region?

